

Exploring Systems of Linear Equations

Overview

Prerequisite Skills:

- Identify slope and y-intercept from $y = mx + b$ and from a graph.
- Graph a line using slope and y-intercept
- Write linear equations in slope-intercept form based on verbal descriptions/story problems or when given a graph.

Learning Goals:

- Describe a system of linear equations and a solution to a system of linear equations.
- Identify whether a system of linear equations has one solution, no solution, or infinitely many solutions based on the graph or equations.
- Create a rule that relates the slope of two lines and the number of solutions in the system.

Common Core State Standards:

[CCSS.Math.Content.8.EE.C.8](#): Analyze and solve pairs of simultaneous linear equations.

[CCSS.Math.Content.8.EE.C.8.a](#): Understand that solutions to a system of two linear equations in two variables correspond to points of intersection of their graphs, because points of intersection satisfy both equations simultaneously.

[CCSS.Math.Content.8.EE.C.8.b](#): Solve systems of two linear equations in two variables algebraically, and estimate solutions by graphing the equations. Solve simple cases by inspection.

[CCSS.Math.Content.8.EE.C.8.c](#): Solve real-world and mathematical problems leading to two linear equations in two variables.

Mathematical Practices:

1. Make sense of problems and persevere in solving them
2. Reason abstractly and quantitatively
4. Model with mathematics.
5. Use appropriate tools strategically
7. Look for and make use of structure

Materials:

- PhET *Graphing Lines* simulation:
https://phet.colorado.edu/sims/html/graphing-lines/latest/graphing-lines_en.html
- Computers/tablets for each student or pair of students
- Exploring Systems of Linear Equations Activity Sheets (1 per student)
- Index cards/exit tickets

Estimated Time:

Approximately 90 minutes, broken into two parts

Exploring Systems of Linear Equations, Part 1

Warm Up

7-10 minutes

Activate prior knowledge using this problem as a warm-up:

Athletic Awesomeness charges \$4 to enter, and \$2 per game played. Sports Stars charges \$3 per game, but only costs \$1 to enter. Decide and justify which activity center you would encourage your sporty crush to attend with you this weekend.

Think-Ink-Pair-Share: Students should spend approximately 1-2 minutes examining the problem, completing scratch work, and writing down their argument. Then, students should turn to a partner and discuss their reasoning.

Simulation Introduction

7-10 minutes

Teacher will...

- Ask a student to distribute activity sheets.
- Encourage students to take a few minutes to explore the Graphing Lines simulation, letting them know they will be using

Students will...

- Explore the simulation, graphing whatever lines they choose.
- Review slope and y-intercept by responding

Comment [M1]: After discussing answers, teacher will let students know that their warm up problem is a simple version of what they will be exploring today, systems of linear equations. **At this point, try not to give a definition for a system or a solution.** Remind students that one of their goals today is to be able to create those definitions

<p>the Slope-Intercept portion of the simulation for today's lesson.</p> <ul style="list-style-type: none"> ● Circulate the room and, somewhat as a review, ask students: <ol style="list-style-type: none"> 1. What does this tool (point locator) do? 2. What do the m and b represent again? 3. What happens if you change the m and b? 4. Can you graph more than one line at a time? ● Ask students to briefly share what they wrote down for #1 on the activity sheet to ensure all students remember how the tool works. 	<p>to teachers' informal questioning.</p> <ul style="list-style-type: none"> ● Jot down discoveries/reminders as #1 on the activity worksheet.
Guided Exploration	15-20 minutes
<i>Teacher will...</i>	<i>Students will...</i>
<ul style="list-style-type: none"> ● Encourage students to begin working on #2-11 in pairs. Try to give them at least 5 minutes where the teacher is silent before probing/aiding. ● Circulate the room to be available for questions and ask probing/pushing questions, such as: <ol style="list-style-type: none"> 1. Why do these graphs intersect? (What makes them intersect?) 2. Is it possible for two lines to intersect more than once? 3. Why do you think those graphs will not intersect? 4. What can be said about two lines that completely overlap? 5. How does the slope affect whether the lines cross? 6. What if both graphs have the same y-intercept but different slopes? 7. If you are graphing a system of equations, what is a system of equations? What do you think the solution is? 	<ul style="list-style-type: none"> ● Complete #2-11 on the activity sheet. ● Respond to teacher questions. ● Ask questions or ask for help as needed.
Discussion and Summary	10-15 minutes
<i>Teacher will...</i>	<i>Students will...</i>
<p>When most students have gotten to the checkpoint on the worksheet...</p> <ul style="list-style-type: none"> ● Facilitate a class discussion to bridge an understanding across representations. Remind students to cover their laptop screens with their worksheets so they are not distracted. Use an established teaching strategy such as pulling name sticks, or small group discussions (print out or display questions and have groups talk to each other and write down consensus for the "speaker" to share aloud with class). Students may want to present their worksheets using document camera as they make their points. The classroom whiteboard could have headings "one point of intersection", "never intersect", and "completely overlap" and a student volunteer records the main ideas of the class discussion. Sample questions include: <ol style="list-style-type: none"> 1. What do you think a system of equations is? 2. What is a solution to <i>one</i> line? What do you think the solution to a <i>system</i> of equations is? 3. What did you notice about the first system where two lines intersect? 	<ul style="list-style-type: none"> ● Answer questions and question answers: students should be able to determine if they agree/disagree with others' claims and justify their own responses. ● Some students may go to the board to share findings, then summarize and record main ideas.

Comment [M2]: If this is not the first time students have used this simulation, they may simply need to review the tools. If this is the first time students have used this simulation, they may need more time to explore the slope and y -intercept.

Comment [M3]: Questions from the discussion section below may also be helpful, just try not to repeat the same questions to the same students.

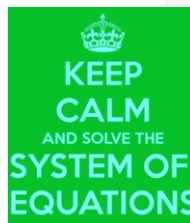
Comment [M5]: It is okay if some students' ideas are not fully developed or if there are still some misconceptions. Allow students to debate conflicting ideas before confirming (if ever) who is correct. This discussion serves as a checkpoint and formative assessment of what discoveries and connections students are making.

<p>4. What did you notice about the second system where the lines never cross? Are you positive even if the graph were expanded the lines would never cross? How do you know?</p> <p>5. Do you notice anything about the slopes? What if the slopes are different? What if the slopes are the same?</p> <p>6. What does it mean for two lines to be parallel?</p> <p>7. What about creating overlapping lines?</p> <p>8. What do you think it means for a system to have one solution? No solutions? Infinitely many solutions?</p> <p>9. Are there any other discoveries we haven't yet discussed?</p>	
Exploring Systems of Linear Equations, Part 2	
Warm Up 5-7 minutes	
<i>Teacher will...</i>	<i>Students will...</i>
<ul style="list-style-type: none"> • Remind students of learning goals/ask students to read them aloud and quickly discuss or assess their own progress. Use the following questions to review: <ol style="list-style-type: none"> 1. What did we discover yesterday? 2. What were the possible ways you could graph more than one line on a coordinate plane? 3. How did the slope of the lines impact whether or not the graphs intersect? • To assess progress, use a stoplight or 1,2,3 method where students hold up a red, yellow, or green card or 1,2,3 to indicate whether they 1/red are stuck, 2/yellow a little confused, or 3/green ready to move on. Teacher should ask students who indicate that they are not ready to move on what is confusing for them, and allow the "green" students to help clarify the misconceptions. Once most issues are settled, move on. Monitor the "red/yellow" students closely during the remainder of the activity, paring with a "green" student if possible. 	<ul style="list-style-type: none"> • Participate in class discussion. • Assess and reflect upon their own progress.
Reinforcement 15-20 minutes	
<i>Teacher will...</i>	<i>Students will...</i>
<ul style="list-style-type: none"> • Encourage students to complete part 2 of the worksheet, using the Graphing Lines simulation in pairs or independently. • Circulate the room to be available for questions and ask probing/pushing questions, such as: <ol style="list-style-type: none"> 1. What is similar/different about the equations within the system? 2. Which equations create parallel lines? 3. What can be said about the equations of two completely overlapping lines, if they are in simplest form? 4. If the two lines completely overlap, how many times do they intersect? • Before students complete the exit ticket, discuss #2 to determine if students can make meaning of the solution to a system of equations. Let them know that in the future, they will be solving more real-world systems of equations. 	<ul style="list-style-type: none"> • Complete remainder of activity sheet (Part 2), answering teacher questions and posing questions as needed.

Comment [M4]: Depending on class period length, this may be the stopping point for the day. Rushing through the Reinforcement section is not advised. Rather, in a 45 minute class period, stop at the checkpoint. Use the beginning of the next class period to review before moving on to reinforcement.

Informal Assessment	5-7 minutes
<i>Teacher will...</i>	<i>Students will...</i>
<ul style="list-style-type: none"> • Praise students for their hard work, perseverance, and discoveries. • Informal formative assessment: Ask students to silently and independently, answer the exit ticket questions. • Reflect: Teacher should review activity sheets and exit tickets to determine students' level of understanding. In a future lesson, students can confirm and summarize key ideas in a graphic organizer (below). 	<ul style="list-style-type: none"> • Show what they know with respect to the learning goals through an exit ticket.

Name: _____ Date: _____ Period: _____



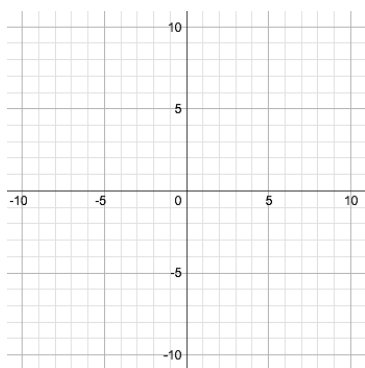
Exploring Systems of Linear Equations, Part 1

Learning Goals


- Define a system of linear equations and a solution to a system of linear equations.
 - Identify whether a system of linear equations has one solution, no solution, or infinitely many solutions based on the graph or equations.
 - Create a rule that relates the slope two lines and the number of solutions in the system.
1. **Explore** the slope-intercept screen for 5 minutes and write down 1–3 discoveries you have made or remembered about using the simulation.

2. **Create** a line and use the button to preserve it. **Create** a second line that **intersects** the first.

3. **Sketch** both lines below (make it fun—use **two colors!**) and **write** their equations in slope-intercept form.



Line 1	$y = \underline{\hspace{1cm}}x + \underline{\hspace{1cm}}$
Line 2	$y = \underline{\hspace{1cm}}x + \underline{\hspace{1cm}}$
Point of intersection	$(\underline{\hspace{1cm}}, \underline{\hspace{1cm}})$



4. Use the **point locator**

to help you determine the *exact* point of intersection and complete the table above. What do you think it means when the two graphs intersect?

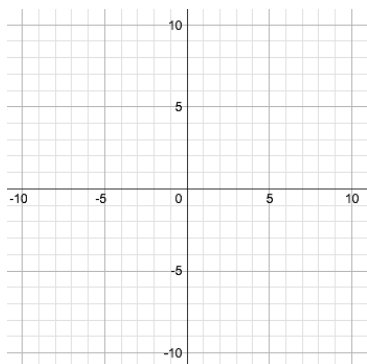
Comment [M6]: Students may not all have systems that have solutions that are exact integers. For this reason, encourage students to be specific if their systems do not intersect on gridlines.

5. With a **partner**, **discuss and summarize** your ideas about the following questions:

Do you think these two lines will ever cross again? Why do you think that?




6. **Erase** both lines in the system of equations to create a new one.
7. **Create** a line and use the **Save Line** button to preserve it. **Create** a second line that will **NEVER intersect** the first.
8. **Sketch** both lines in the system of equations below (make it fun—use **two colors!**) and **write** their equations in slope-intercept form.



Line 1	$y = \underline{\hspace{1cm}}x + \underline{\hspace{1cm}}$
Line 2	$y = \underline{\hspace{1cm}}x + \underline{\hspace{1cm}}$
Point of intersection	Remember—these lines should NEVER intersect.

Comment [M7]: It may be difficult for students to graph lines with the exact same slope, which is why question 9 asks students about an expanded coordinate plane. Even if students make a mistake here and do not have exactly parallel lines, their slopes should be somewhat close together.

9.  With a **partner, discuss and summarize** your ideas about the following questions:
Why do you think these lines will not intersect? If the coordinate plane expanded (if your graph were bigger), would the lines intersect later? What do you notice about their equations?

10. **Erase** both lines in the system of equations to create a new one.
11. **Create** a line and use the **Save Line** button to preserve it. **Create** a second line that will **completely OVERLAPS** the first. What do you think has to be true about the equations of the two lines in order for them to completely overlap?

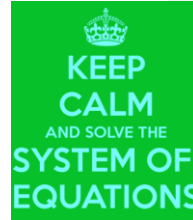
Comment [M8]: Students may think this is a trick question because when they try to overlap their original line, they may not be able to see both lines at once. If they seem frustrated, say “you’re not wrong, but why does it seem like the original line disappeared?”

Checkpoint!

12. You're doing great! Wait here for class discussion before moving on!

Name: _____ Date: _____ Period: _____

Exploring Systems of Linear Equations, Part 2

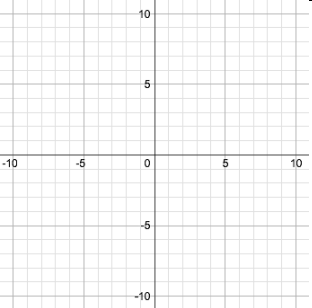


Learning Goals

- Define a system of linear equations and a solution to a system of linear equations.
- Identify whether a system of linear equations has one solution, no solution, or infinitely many solutions based on the graph or equations.
- Create a rule that relates the slope two lines and the number of solutions in the system.

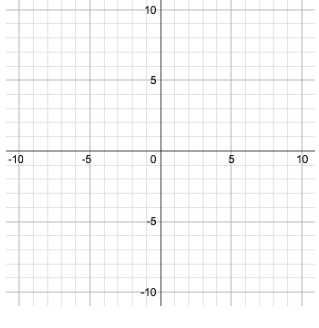
1. For each row of the table, **graph** the system of equations on a clean coordinate plane.

System	Graph	Solutions
$y = \frac{2}{3}x + 3$ $y = \frac{4}{6}x - 5$		<input type="checkbox"/> One solution (,) <input type="checkbox"/> No solutions \emptyset <input type="checkbox"/> Infinitely many solutions
$y = x + 2$ $y = -2x - 1$		<input type="checkbox"/> One solution (,) <input type="checkbox"/> No solutions \emptyset <input type="checkbox"/> Infinitely many solutions

$y = \frac{1}{2}x + 3$ $y = \frac{-3}{-6}x + \frac{18}{6}$ <p>*Hint: can you simplify the second equation first?</p>		<input type="checkbox"/> One solution (,) <input type="checkbox"/> No solutions \emptyset <input type="checkbox"/> Infinitely many solutions
$y = \frac{4}{5}x + 2$ $y = \frac{4}{5}x - 6$	Try this without graphing. How do you know how many solutions will there be?	<input type="checkbox"/> One solution (,) <input type="checkbox"/> No solutions \emptyset <input type="checkbox"/> Infinitely many solutions
$y = \frac{1}{4}x + 2$ $y = \frac{2}{8}x - (-2)$	Try this without graphing. How do you know how many solutions will there be?	<input type="checkbox"/> One solution (,) <input type="checkbox"/> No solutions \emptyset <input type="checkbox"/> Infinitely many solutions
$y = \frac{2}{5}x + 2$ $y = \frac{4}{3}x + 1$	Try this without graphing. How do you know how many solutions will there be?	<input type="checkbox"/> One solution (,) <input type="checkbox"/> No solutions \emptyset <input type="checkbox"/> Infinitely many solutions

Comment [M9]: Hopefully students will see the pattern of same slopes resulting in no solution, different slopes giving one solution, and equivalent equations as the same line and infinite solutions. This portion of the activity is to help students recognize the patterns from the equations rather than needing the graph.

2. Look back to the warm up.... Athletic Awesomeness charges \$4 to enter, and \$2 per game played. Sports Stars charges \$3 per game, but only costs \$1 to enter. **Complete the chart below for this system of equations.**

Equations in the system	Graph	Solutions
$y = \underline{\quad}x + \underline{\quad}$ $y = \underline{\quad}x + \underline{\quad}$		<input type="checkbox"/> One solution (,) <input type="checkbox"/> No solutions \emptyset <input type="checkbox"/> Infinitely many solutions What does the solution mean in this situation? <hr/> <hr/> <hr/> <hr/>

Comment [M10]: At this point, the teacher wants students to realize that the ordered pair can represent a real life situation. In this example, students should determine that the solution is where both companies charge the same amount for the same number of hours.



3. Answer the following questions on an index card with your **name** on it.

- a) **Describe** a system of linear equations and its solution.
- b) How can you **determine** whether a system of linear equations has one solution, no solution, or infinitely many solutions by looking at the **graph**?
- c) How can you **determine** whether a system of linear equations has one solution, no solution, or infinitely many solutions by looking at the **equation**?

Systems of Linear Equations Graphic Organizer

Solutions of a System of Linear Equations

If the system of linear equations has...	Sample system of equations	What is true about the slopes and y-intercepts in the equations?	What do the graphs look like?
One solution			
No solutions \emptyset			
Infinitely many solutions			

Comment [M11]: The graphic organizer can be used to help students summarize what they learned through the simulation and corresponding activity sheets. This would be a great time for the teacher to ensure that everyone is able to identify key characteristics of systems of equations and their solution(s). This should be used following the activity.

Solve the system image: <http://www.keepcalm-o-matic.co.uk/p/keep-calm-and-solve-the-system-of-equations/>

Talk it out image: <https://www.pinterest.com/pin/187462403213195267/>

Exit ticket image: <http://www.keepcalm-o-matic.co.uk/p/keep-calm-and-write-your-exit-ticket/>